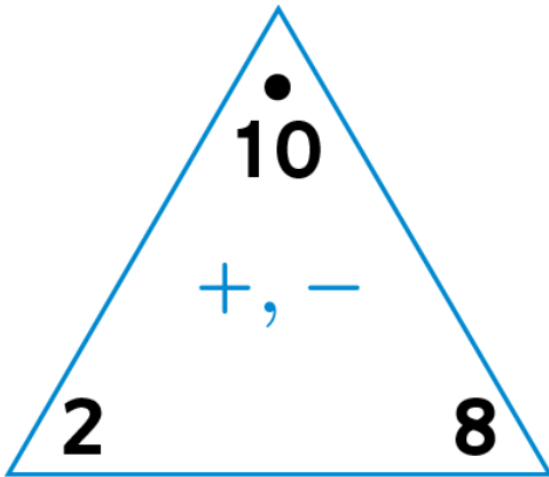


## Unit 7 Everyday Math Assessment

Name: \_\_\_\_\_

- 1 Write the fact family.



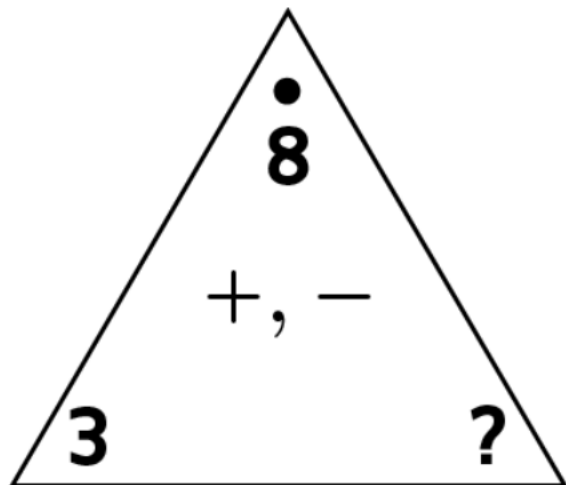
$$\underline{\quad} + \underline{\quad} = \underline{\quad}$$

$$\underline{\quad} + \underline{\quad} = \underline{\quad}$$

$$\underline{\quad} - \underline{\quad} = \underline{\quad}$$

$$\underline{\quad} - \underline{\quad} = \underline{\quad}$$

- 2 Fill in the missing numbers.



$$3 + \square = 8$$

$$\square + 3 = 8$$

$$8 - \square = 3$$

$$8 - 3 = \square$$



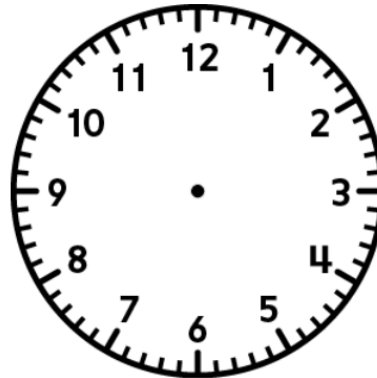
8 Subtract.

$$\begin{array}{r} 5 \\ - 5 \\ \hline \square \end{array} \quad \begin{array}{r} 8 \\ - 4 \\ \hline \square \end{array} \quad \begin{array}{r} 7 \\ - 1 \\ \hline \square \end{array} \quad \begin{array}{r} 10 \\ - 7 \\ \hline \square \end{array} \quad \begin{array}{r} 6 \\ - 3 \\ \hline \square \end{array}$$

9 What time is it?



10 Draw the hands to show 3:00.



11 Find the rule. Fill in the missing numbers.

in	out
4	14
50	60
22	32
55	