

## Unit 8 Math Assessment

Name \_\_\_\_\_

- 1 a Draw a shape that has 4 sides and that has 4 corners that all look the same. Make your shape blue with yellow spots.

- 1 b Name one defining attribute of your shape.

\_\_\_\_\_

Name one nondefining attribute of your shape.

\_\_\_\_\_

What is your shape called?


\_\_\_\_\_

\_\_\_\_\_


- 2 Show one way you could share the piece of paper equally with one friend.



- 
- 3 Show one way to share the pancake equally among 4 people.



- 4 Sam and Chris shared this cracker equally.



Write one name for one of the equal shares of the cracker.

---

Theo is playing *I Spy!* What shapes is he describing?

- 8 This shape has stripes, 6 flat faces, and 8 corners.  
The faces are all the same size.  
What shape is it?

Circle the name of the 3D shape Theo spied:

sphere

cube

pyramid

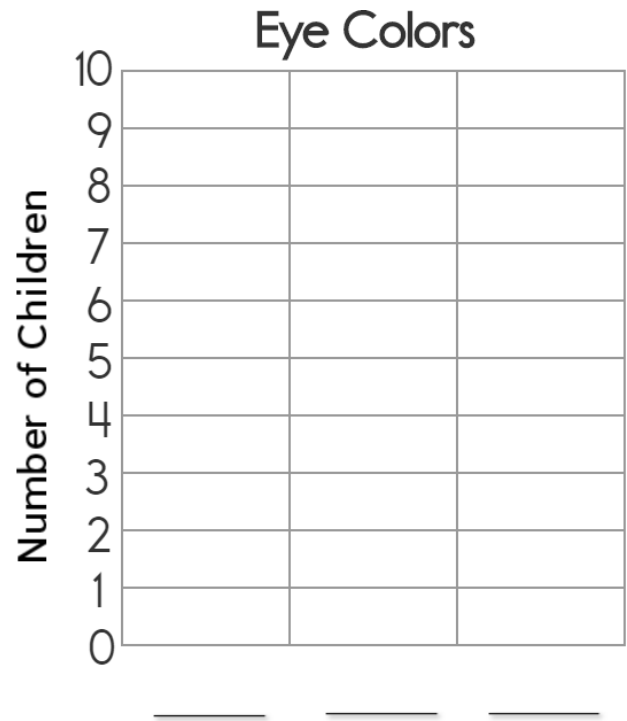
square

star

---

- 10 Use the information in the tally chart to complete the bar graph.

Eye Colors	
Blue	### //
Green	////
Brown	### ///



- 12 Complete the number-grid puzzle.

21	<input type="text"/>	23
<input type="text"/>	32	<input type="text"/>
41	<input type="text"/>	43

13 Complete the number-grid puzzle.

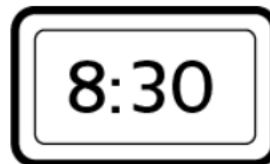
<input type="text"/>	<input type="text"/>	76
<input type="text"/>	<input type="text"/>	86
94	95	<input type="text"/>

14 What time is it?



\_\_\_\_\_ : \_\_\_\_\_

15 Draw the hands.



16 Fill in the missing numbers.

**Rule**  
+10

